

Surname	Centre Number	Candidate Number
Other Names		2



GCE AS/A level

1092/01



S15-1092-01

CHEMISTRY – CH2

P.M. TUESDAY, 2 June 2015

1 hour 30 minutes

For Examiner's use only		
Question	Maximum Mark	Mark Awarded
Section A 1. to 8.	10	
Section B 9.	13	
10.	12	
11.	16	
12.	15	
13.	14	
Total	80	

ADDITIONAL MATERIALS

In addition to this examination paper, you will need a:

- calculator;
- **Data Sheet** containing a **Periodic Table** supplied by WJEC. Refer to it for any **relative atomic masses** you require.

INSTRUCTIONS TO CANDIDATES

Use black ink or black ball-point pen. Do not use gel pen or correction fluid.

Write your name, centre number and candidate number in the spaces at the top of this page.

Section A Answer **all** questions in the spaces provided.

Section B Answer **all** questions in the spaces provided.

Candidates are advised to allocate their time appropriately between **Section A (10 marks)** and **Section B (70 marks)**.

INFORMATION FOR CANDIDATES

The number of marks is given in brackets at the end of each question or part-question.

The maximum mark for this paper is 80.

Your answers must be relevant and must make full use of the information given to be awarded full marks for a question.

The **QWC** label alongside particular part-questions indicates those where the Quality of Written Communication is assessed.

If you run out of space, use the additional page(s) at the back of the booklet, taking care to number the question(s) correctly.



JUN1510920101

SECTION A

Answer all questions in the spaces provided.

1. Complete the electronic structure for the oxide ion present in magnesium oxide. [1]

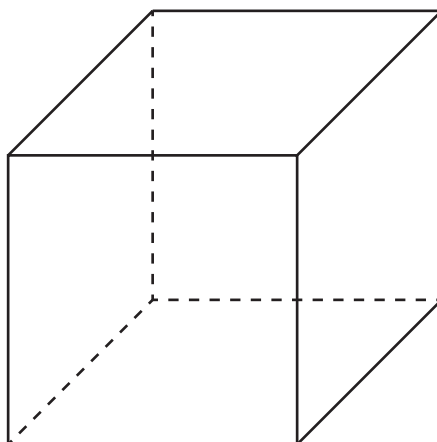
1s²

2. Draw a dot and cross diagram to show the bonding in calcium fluoride. You should include outer electrons only and give any charges. [2]

3. Give the meaning of the term *electronegativity*. [1]

.....
.....

4. Complete and label the diagram to show the positions of the ions present in caesium chloride, CsCl. [1]



5. State the reagent(s) used and the colour change seen when a primary alcohol is oxidised to give a carboxylic acid. [2]

Reagent(s)

Colour change from to

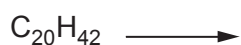
6. State the systematic name of the compound shown below. [1]



.....

7. On cracking, one molecule of $\text{C}_{20}\text{H}_{42}$ can produce one molecule of pentene, one molecule of hexene and one molecule of another product.

Complete the equation for this reaction. [1]



8. Draw the repeat unit of the polymer formed from the monomer $\text{CH}_3\text{CH}_2\text{CH}=\text{CHCH}_3$. [1]

Total Section A [10]



SECTION B

Answer all questions in the spaces provided.

9. (a) Sodium and potassium both react with cold water but their reactivities are different. The first ionisation energy affects the reactivity of Group 1 elements.

(i) Give an observation that shows the difference in reactivity with cold water between sodium and potassium. [1]

.....
.....

(ii) Describe the trend in the first ionisation energy of Group 1 elements and explain why this trend occurs. [2]

.....
.....
.....

(iii) Explain how this trend affects the reactivity of Group 1 elements. [1]

.....
.....



(b) A GCSE student said that, apart from metallic bonding, bonds were either ionic or covalent. An A level student said that this was not really true and that bonds could be intermediate between ionic and covalent.

(i) State **one** factor that governs what type of bond elements form and explain how this leads to different types of bonding. [2]

.....

.....

.....

(ii) Describe the electron density in each type of bond. [3]

Ionic

.....

.....

Covalent

.....

.....

Intermediate

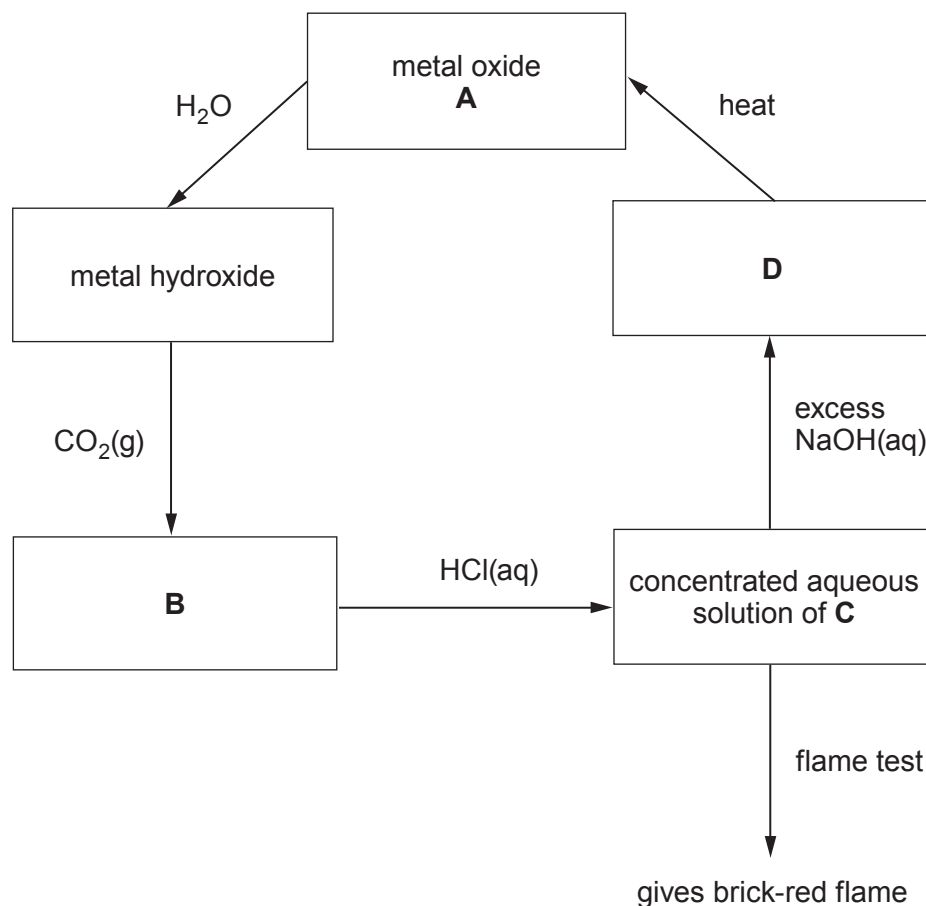
.....

.....



(c) Compound **A** is the oxide of a metal.

The diagram shows some reactions of compound **A**, and associated compounds, that can be carried out in the laboratory.



- (i) What metal is present in compound **A**? [1]

- (ii) What compound containing the metal is present in the aqueous solution **C**? [1]

- (iii) Describe the appearance of the contents of the test tube with compound **D**. [1]

- (iv) Write the **ionic** equation for the reaction between solution **C** and aqueous sodium hydroxide. [1]

Total [13]





BLANK PAGE

**PLEASE DO NOT WRITE
ON THIS PAGE**



10. (a) State why nitrogen is described as a *p*-block element. [1]

.....

.....

(b) (i) Draw a dot and cross diagram to show the electrons in the ammonium ion, NH_4^+ .
You should include outer electrons only. [1]

(ii) State the bond angle in the ammonium ion. Explain why this is the case. [2]

.....

.....

.....

(iii) Ammonia reacts with oxygen to give nitrogen(II) oxide and water.
Complete the equation for this reaction. [1]



- (c) When sodium nitrate is heated it decomposes.



- (i) Use oxidation numbers to complete the following.

In this reaction has been reduced because its oxidation state has changed from to [2]

- (ii) What volume of oxygen, measured at room temperature and pressure, could be obtained by heating 4.40 g of sodium nitrate? [3]

[The volume of 1 mol of oxygen is 24.0 dm³ under these conditions]

Volume of oxygen = dm³

- (d) A sample of sodium nitrate of mass 65 g was added to 50 g of cold water and the mixture was heated until it all dissolved.

The table gives information about the solubility of sodium nitrate at various temperatures.

Solubility of NaNO ₃ /g per 100g water	Temperature/°C
88	20
96	30
103	40
112	50
122	60
133	70

Use the data in the table to calculate the mass of sodium nitrate that crystallised when the solution was cooled to 30 °C. [2]

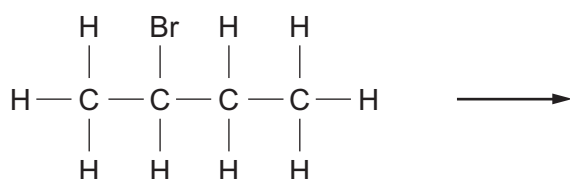
Mass that crystallised = g

Total [12]



11. 2-Bromobutane, C_4H_9Br , is a halogenoalkane that behaves in a similar way to 1-chlorobutane.

- (a) (i) Complete the diagram below to show the mechanism for the reaction between 2-bromobutane and aqueous sodium hydroxide. You should include relevant charges, dipoles, lone pairs and curly arrows to show the movement of electron pairs. [4]



- (ii) What **type** of mechanism is shown in (a)(i)? [1]

- (iii) The reaction involves heterolytic bond fission.

What is meant by *heterolytic bond fission*? [1]



(b) Bromoethane can be converted into ethene.

(i) Name the reagent and solvent needed to convert bromoethane into ethene. [1]

.....

(ii) What **type** of reaction occurs in (b)(i)? [1]

.....

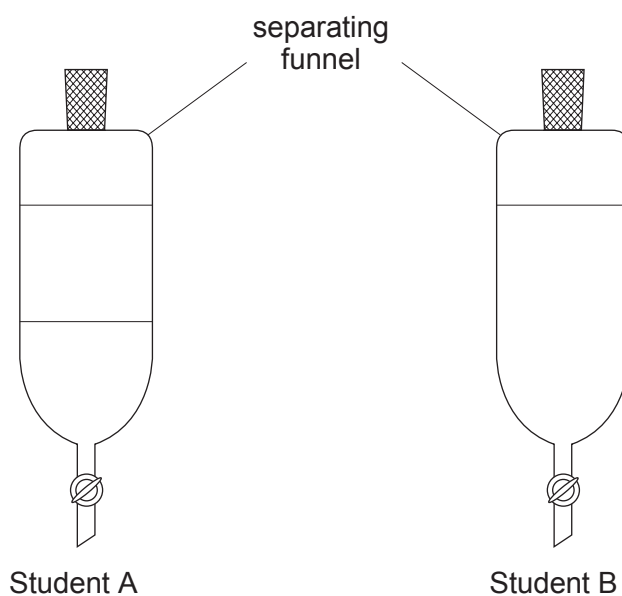
(iii) 2-Bromobutane behaves in a similar way to bromoethane in this type of reaction. When 2-bromobutane is reacted as described in (b)(i) two alkenes that are **structural** isomers are formed.

Draw the displayed formulae of these two alkenes. [2]



- (c) Two students were each given a different alcohol. They each added their alcohol to water in a separating funnel, shook the mixture and then left it to stand.

The diagrams show the results.



What can be deduced about the alcohols given to each student? You should explain why the alcohols behave differently in this experiment.

[5]

QWC [1]

.....

.....

.....

.....

.....

.....

.....

.....

.....

Total [16]



BLANK PAGE

**PLEASE DO NOT WRITE
ON THIS PAGE**



12. Explain each of the following observations concerning substances that you have met in your study of Chemistry.

(a) Aluminium has a higher melting temperature than sodium.

You should refer to the nature of the bonding.

[3]
QWC [1]

.....

.....

.....

.....

(b) The colour of an aqueous solution of potassium iodide changes to brown when chlorine is bubbled through.

You should include an equation for the reaction that occurs.

[3]

.....

.....

.....

.....

(c) Ammonia was used as a refrigerant because it is relatively easy to liquefy. Ethane could not be used for this purpose.

You should refer to intermolecular forces.

[4]

.....

.....

.....

.....



- (d) The reaction between methane and chlorine does not produce a pure sample of chloromethane, CH_3Cl .

You should include the name of the mechanism of the reaction involved and give an equation to show the formation of a product other than chloromethane. [3]

QWC [1]

.....

.....

.....

Total [15]

Examiner
only



13. (a) An acid **F** was known to be one of the following.



A sample of 1.20 g of acid **F** was burned in excess oxygen. 1.79 g of carbon dioxide was formed.

(i) Calculate the mass of carbon present in the sample of acid **F**. [1]

Mass of carbon = g

(ii) The mass of hydrogen in the sample is 0.061 g. Assuming that the rest of the sample is oxygen, calculate the mass of oxygen in the sample. [1]

Mass of oxygen = g

(iii) Use your answers to parts (i) and (ii) to find the empirical formula of acid **F**. [2]

Empirical formula

(iv) State the identity of acid **F**. Show clearly how you reached this conclusion. [1]

.....
.....



- (v) Describe a chemical test that would distinguish between Acid 1 and Acid 2. You should include the expected results. [1]

.....

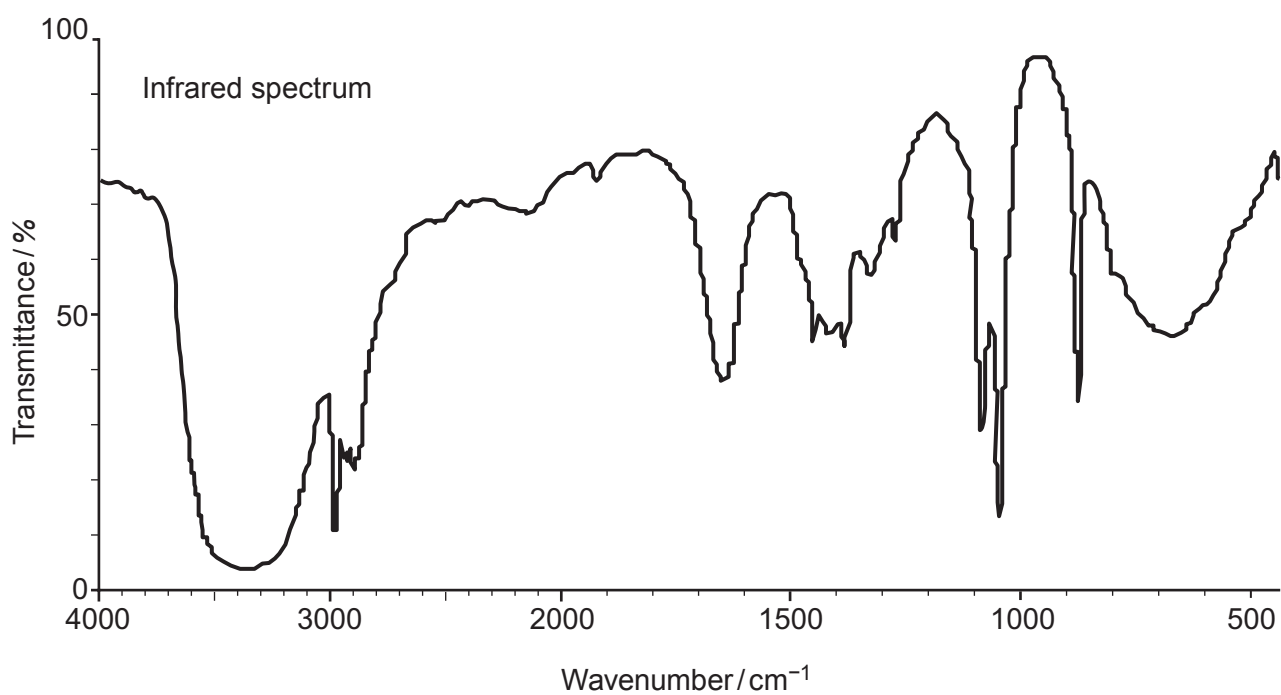
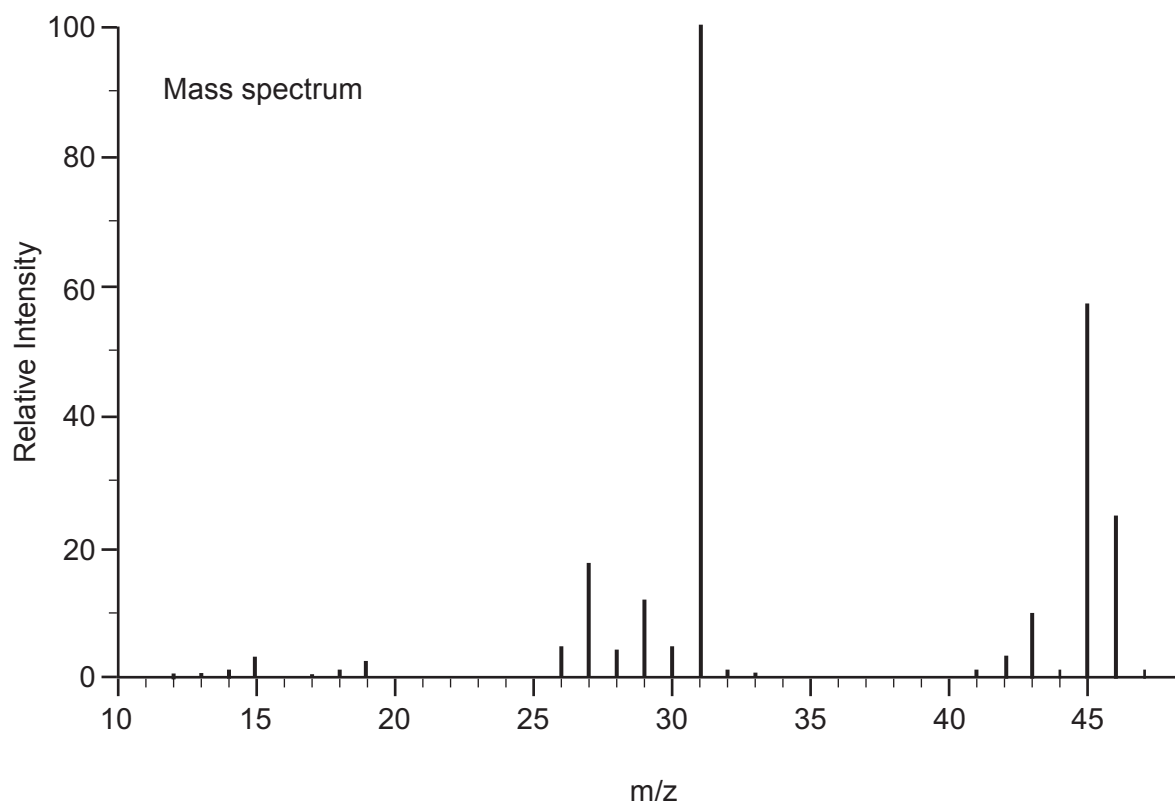
.....

- (vi) Draw the structural formula of the alcohol that can be oxidised to form Acid 2. [1]



(b) Spectra give much information about the structure of organic compounds.

The mass spectrum and infrared spectrum of ethanol, C_2H_5OH , are shown.



(i) What can be deduced by the presence of the peak at m/z 46 in the mass spectrum? [1]

.....
(ii) What can be deduced by the presence of the peak at m/z 15 in the mass spectrum? [1]

.....
(iii) What can be deduced by the presence of an absorption peak at 3100 to 3500 cm^{-1} in the infrared spectrum? [1]

.....
(c) Ethene can be converted into ethanol and ethanol can be converted into ethene. For each conversion, state the reagent(s) used and the conditions needed. [4]

ethene to ethanol

.....
ethanol to ethene

.....
Total [14]

Total Section B [70]

END OF PAPER



BLANK PAGE

**PLEASE DO NOT WRITE
ON THIS PAGE**



Examiner
only

Question number	Additional page, if required. Write the question number(s) in the left-hand margin.
	A large area for writing with horizontal dotted lines for each row. The first column is reserved for the question number.



BLANK PAGE

**PLEASE DO NOT WRITE
ON THIS PAGE**





GCE AS/A level

1092/01-A



S15-1092-01A

**CHEMISTRY – DATA SHEET
FOR USE WITH CH2**

P.M. TUESDAY, 2 June 2015

Infrared Spectroscopy characteristic absorption values

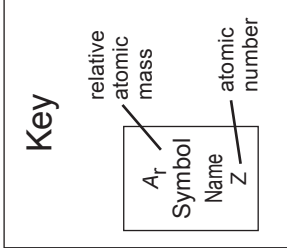
Bond	Wavenumber / cm⁻¹
C—Br	500 to 600
C—Cl	650 to 800
C—O	1000 to 1300
C=C	1620 to 1670
C=O	1650 to 1750
C≡N	2100 to 2250
C—H	2800 to 3100
O—H	2500 to 3550
N—H	3300 to 3500

THE PERIODIC TABLE

Group 1 2 3 4 5 6 7 0

Period 1 2 3 4 5 6 7

1	1.01 H Hydrogen 1	4.00 He Helium 2	p Block												
2	6.94 Li Lithium 3	9.01 Be Beryllium 4							10.8 B Boron 5	12.0 C Carbon 6	14.0 N Nitrogen 7	16.0 O Oxygen 8	19.0 F Fluorine 9	20.2 Ne Neon 10	
3	23.0 Na Sodium 11	24.3 Mg Magnesium 12	27.0 Al Aluminium 13	28.1 Si Silicon 14	31.0 P Phosphorus 15	32.1 S Sulfur 16	35.5 Cl Chlorine 17	40.0 Ar Argon 18							
4	39.1 K Potassium 19	40.1 Ca Calcium 20	d Block						65.4 Zn Zinc 30	69.7 Ga Gallium 31	72.6 Ge Germanium 32	74.9 As Arsenic 33	79.0 Se Selenium 34	79.9 Br Bromine 35	83.8 Kr Krypton 36
5	85.5 Rb Rubidium 37	87.6 Sr Strontium 38							54.9 Mn Manganese 25	55.8 Fe Iron 26	58.7 Ni Nickel 28	58.9 Co Cobalt 27	63.5 Cu Copper 29	65.4 Zn Zinc 30	69.7 Ga Gallium 31
6	133 Cs Caesium 55	137 Ba Barium 56	91.2 Zr Zirconium 40	101 Ru Ruthenium 44	106 Pd Palladium 46	103 Rh Rhodium 45	108 Ag Silver 47	112 Cd Cadmium 48	115 In Indium 49	119 Sn Tin 50	122 Sb Antimony 51	128 Te Tellurium 52	127 I Iodine 53	131 Xe Xenon 54	
7	(223) Fr Francium 87	(226) Ra Radium 88	140 Ce Cerium 58	150 Sm Samarium 62	157 Gd Gadolinium 64	(153) Eu Europium 63	159 Tb Terbium 65	163 Dy Dysprosium 66	165 Ho Holmium 67	167 Er Erbium 68	169 Tm Thulium 69	(210) Po Polonium 84	(210) At Astatine 85	(222) Rn Radon 86	



f Block

140 Ce Cerium 58	141 Pr Praseodymium 59	144 Nd Neodymium 60	(147) Pm Promethium 61	150 Sm Samarium 62	(153) Eu Europium 63	157 Gd Gadolinium 64	159 Tb Terbium 65	163 Dy Dysprosium 66	165 Ho Holmium 67	167 Er Erbium 68	169 Tm Thulium 69	173 Yb Ytterbium 70	175 Lu Lutetium 71
232 Th Thorium 90	(231) Pa Protactinium 91	238 U Uranium 92	(237) Np Neptunium 93	(242) Pu Plutonium 94	(243) Am Americium 95	(247) Cm Curium 96	(245) Bk Berkelium 97	(251) Cf Californium 98	(254) Es Einsteinium 99	(253) Fm Fermium 100	(256) Md Mendelevium 101	(254) No Nobelium 102	(257) Lr Lawrencium 103

► Lanthanoid elements

►► Actinoid elements